

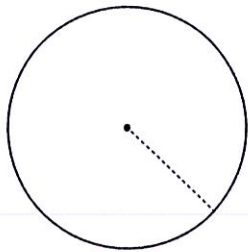
Unit 4 Pre-Skills Review

Area of a Circle: _____

Circumference of a Circle: _____

Pythagorean Theorem: _____

1)

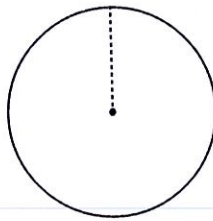


Circumference = 38π cm

Radius = _____

Area = _____

2)

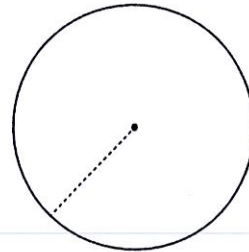


Circumference = 10π ft

Radius = _____

Area = _____

3)

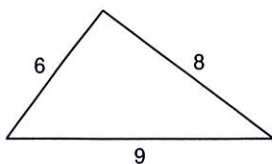


Circumference = 24π m

Radius = _____

Area = _____

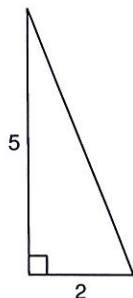
4. Is this a right triangle?



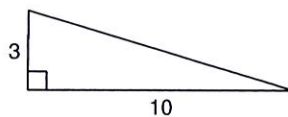
5-

Find each missing length to the nearest tenth.

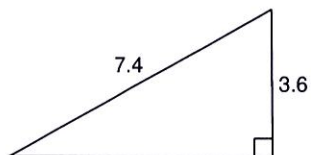
5.



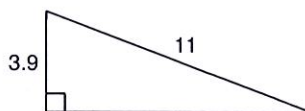
6.



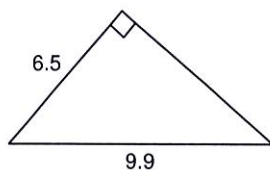
7.



8.



9.



10.

